



INDIAN SCHOOL AL WADI AL KABIR  
DEPARTMENT OF MATHEMATICS 2024 – 2025




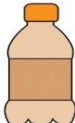




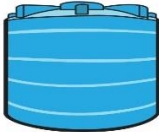


TOPIC: Measurement of Capacity

Worksheet - 1

RESOURCE PERSON: Mrs. Gloria Gomes

NAME: \_\_\_\_\_ CLASS: I SEC: \_\_\_\_ DATE: \_\_\_\_\_

I. Tick mark (✓) the container which holds more fluid/ water and cross out (X) the container which holds less.

 <input type="checkbox"/>	 <input type="checkbox"/>	 <input type="checkbox"/>	 <input type="checkbox"/>
 <input type="checkbox"/>	 <input type="checkbox"/>	 <input type="checkbox"/>	 <input type="checkbox"/>
 <input type="checkbox"/>	 <input type="checkbox"/>	 <input type="checkbox"/>	 <input type="checkbox"/>

CHECKED BY: ACADEMIC COORDINATOR – CLASS 1  
ISWK/ DEPARTMENT OF MATHEMATICS 2024 -2025



INDIAN SCHOOL AL WADI AL KABIR  
DEPARTMENT OF MATHEMATICS 2024 – 2025

TOPIC: Measurement of Length


Worksheet - 2

RESOURCE PERSON: Mrs. Gloria Gomes

NAME: \_\_\_\_\_ CLASS: I SEC: \_\_\_\_ DATE: \_\_\_\_\_

I. Answer the questions and tick mark (✓) the correct option.

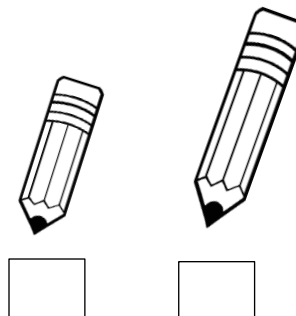
a. Which tree is taller?




b. Which ladder is shorter?



c. Which pencil is longer?



d. Which jar is smaller?



CHECKED BY: ACADEMIC COORDINATOR – CLASS 1  
ISWK/ DEPARTMENT OF MATHEMATICS 2024 -2025